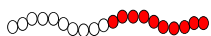
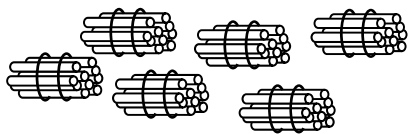
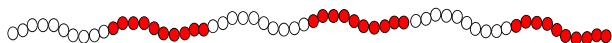
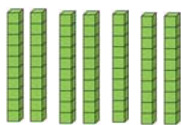



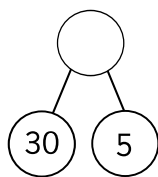
The diagrams represent different numbers.



| Tens | Ones |
|------|------|
| | |



| Tens | Ones |
|------|------|
| | |



Which is the greatest number? _____

Which is the smallest number? _____

Complete the number sentence.

_____ > _____

Which is the greatest number? _____

Which is the smallest number? _____

Complete the number sentence.

_____ > _____

Which is the greatest number? _____

Which is the smallest number? _____

Complete the number sentence.

_____ > _____

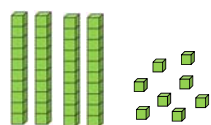
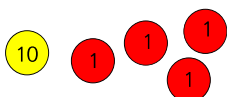
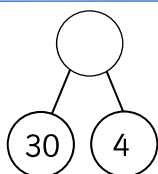
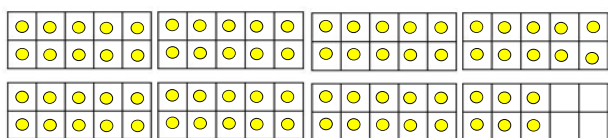
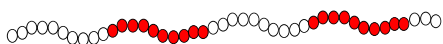

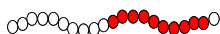
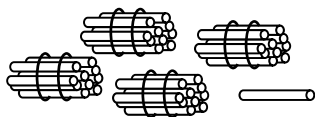
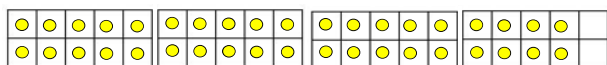
Which is the greatest number? _____

Which is the smallest number? _____


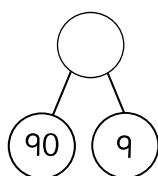
Complete the number sentence.

_____ > _____

The diagrams represent different numbers.



| Tens | Ones |
|------|------|
| | |



Which is the greatest number? _____

Which is the smallest number? _____

Complete the number sentence.

_____ > _____

Which is the greatest number? _____

Which is the smallest number? _____

Complete the number sentence.

_____ > _____

Which is the greatest number? _____

Which is the smallest number? _____

Complete the number sentence.

_____ < _____

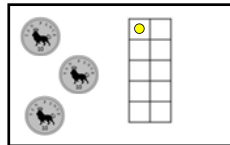
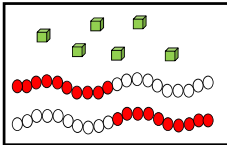
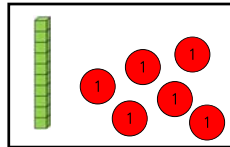
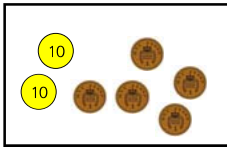
Which is the greatest number? _____

Which is the smallest number? _____

Complete the number sentence.

_____ < _____

The diagrams represent different numbers.

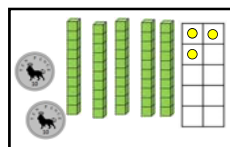
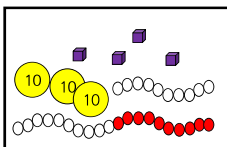
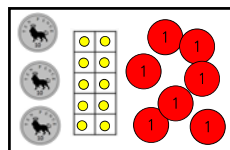
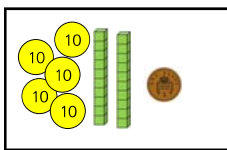


Which is the greatest number? _____

Which is the smallest number? _____

Complete the number sentence.

_____ > _____ > _____ > _____

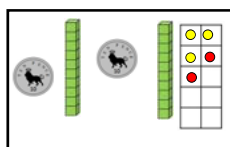
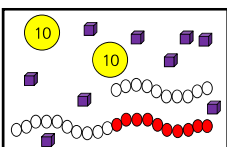
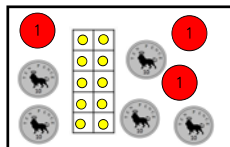
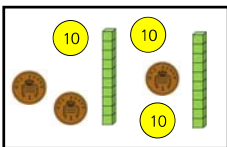


Which is the greatest number? _____

Which is the smallest number? _____

Complete the number sentence.

_____ > _____ > _____ > _____

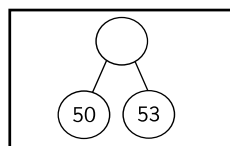
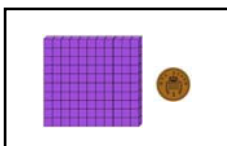
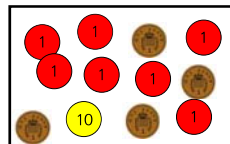
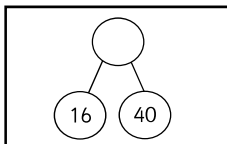


Which is the greatest number? _____

Which is the smallest number? _____

Complete the number sentence.

_____ < _____ < _____ < _____



Which is the greatest number? _____

Which is the smallest number? _____

Complete the number sentence.

_____ < _____ < _____ < _____